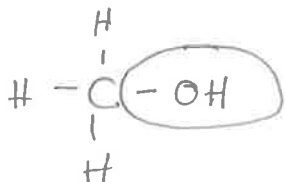


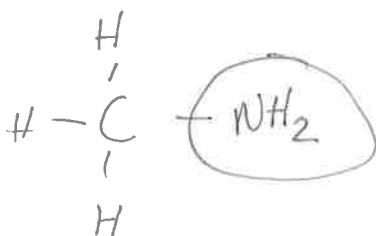
Name: Key

Quiz 2

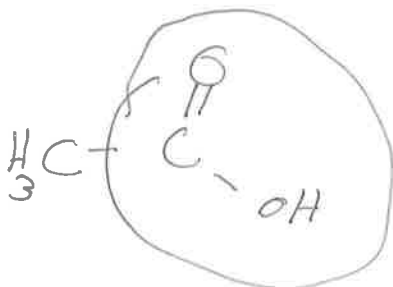
1. Draw an organic molecule that contains a hydroxyl group. Circle the hydroxyl group.



2. Draw an organic molecule that contains an amine group. Circle the amine group.



3. Draw an organic molecule that contains a carboxylic acid group. Circle the carboxylic acid group.



4. Draw an organic molecule that contains an amide group. Circle the amide group.

